
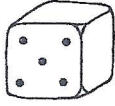




Verdoppelungsaufgaben (2)

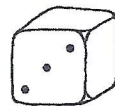
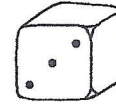
1



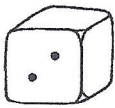
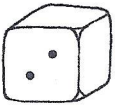
$$+ =$$





$$+ =$$



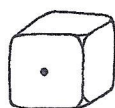
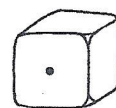
$$+ =$$



$$+ =$$



$$+ =$$



$$+ =$$

2



$$+ =$$



$$+ =$$



$$+ =$$



$$+ =$$



$$+ =$$